
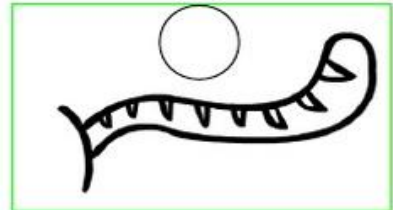
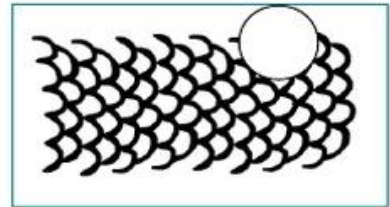

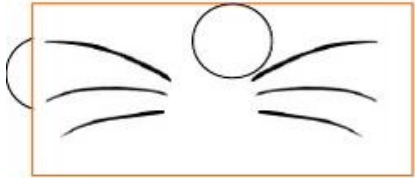


Tarea 2nd grade – week 8

Name: _____

Escribe el número que corresponda en cada imagen



1. beak
2. shell
3. claws
4. reptile
5. teeth
6. feather
7. fur
8. tail
9. wings
10. scales
11. whiskers

